

## Reken uit.



$11 + 5 = \dots\dots\dots$

$17 + 2 = \dots\dots\dots$

$16 + 4 = \dots\dots\dots$

$11 + 7 = \dots\dots\dots$



$15 + 4 = \dots\dots\dots$

$13 + 4 = \dots\dots\dots$

$12 + 7 = \dots\dots\dots$

$12 + 5 = \dots\dots\dots$

$16 + 3 = \dots\dots\dots$

$16 + 3 = \dots\dots\dots$

$14 + 2 = \dots\dots\dots$

$13 + 6 = \dots\dots\dots$

$14 + 2 = \dots\dots\dots$

$14 + 3 = \dots\dots\dots$

$12 + 3 = \dots\dots\dots$

$15 + 5 = \dots\dots\dots$

$12 + 6 = \dots\dots\dots$

$15 + 3 = \dots\dots\dots$

$14 + 5 = \dots\dots\dots$

$14 + 4 = \dots\dots\dots$

$19 - 3 = \dots\dots\dots$

$17 - 2 = \dots\dots\dots$

$18 - 3 = \dots\dots\dots$

$17 - 3 = \dots\dots\dots$

$19 - 8 = \dots\dots\dots$

$16 - 4 = \dots\dots\dots$

$17 - 2 = \dots\dots\dots$

$18 - 6 = \dots\dots\dots$

$17 - 6 = \dots\dots\dots$

$19 - 2 = \dots\dots\dots$

$18 - 8 = \dots\dots\dots$

$15 - 3 = \dots\dots\dots$

$17 - 4 = \dots\dots\dots$

$17 - 5 = \dots\dots\dots$

$13 - 2 = \dots\dots\dots$

$17 - 1 = \dots\dots\dots$

$16 - 3 = \dots\dots\dots$

$14 - 3 = \dots\dots\dots$

$15 - 4 = \dots\dots\dots$

$16 - 2 = \dots\dots\dots$

GAVERDER →

1

**Reken uit.**

Teken de sprong.



48

$48 + 10 = \dots\dots$

23

$23 - 10 = \dots\dots$

56

$56 + 10 = \dots\dots$

78

$78 - 10 = \dots\dots$

33

$33 + 10 = \dots\dots$

34

$34 - 10 = \dots\dots$

83

$83 + 10 = \dots\dots$

96

$96 - 10 = \dots\dots$

24

$24 + 10 = \dots\dots$

45

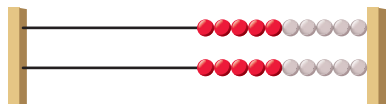
$45 - 10 = \dots\dots$

GAVERDER →

2

**Welke 2 sommen horen erbij?**

Je mag naar het rekenrek kijken.



Frank: 12 goed

Daan: 8 goed



Renske loopt een tocht van 15 kilometer. Ze heeft al 8 kilometer gelopen. Hoeveel kilometer moet ze nog lopen?

som: .....

som: .....

antwoord: ..... kilometer

De rode toren is 14 blokken hoog. De blauwe toren 9 blokken hoog. Hoeveel blokken heeft de rode toren meer?

som: .....

som: .....

antwoord: ..... blokken

Bas is 13 jaar. Zijn zusje is 8 jaar. Hoeveel jaar is zijn zusje jonger?

som: .....

som: .....

antwoord: ..... jaar

Frank heeft meer antwoorden goed dan Daan. Hoeveel meer?

som: .....

som: .....

antwoord: ..... antwoorden

De bruine doos weegt meer dan de blauwe doos. Hoeveel meer?

som: .....

som: .....

antwoord: ..... kilogram

3

**Reken uit.**

Je mag de getallenlijn gebruiken.

$89 + \dots = 90$

$90 - 5 = \dots$

$62 + \dots = 70$

$60 - 8 = \dots$

$74 + \dots = 80$

$30 - 3 = \dots$

$36 + \dots = 40$

$70 - 2 = \dots$

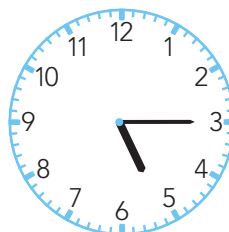
$53 + \dots = 60$

$20 - 8 = \dots$

4a

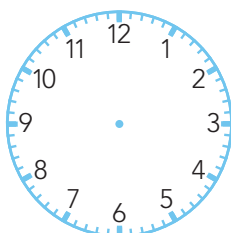
**Hoe laat is het?**

.....

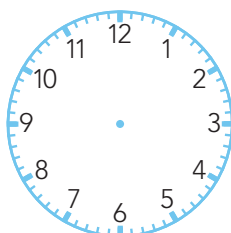


.....

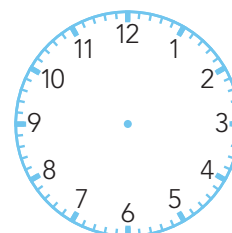
4b

**Hoe laat is het?**

kwart over 12



kwart over 9



kwart voor 8