

Reken uit.



$11 + 5 = 16$

$17 + 2 = 19$

$16 + 4 = 20$

$11 + 7 = 18$



$15 + 4 = 19$

$13 + 4 = 17$

$12 + 7 = 19$

$12 + 5 = 17$

$16 + 3 = 19$

$16 + 3 = 19$

$14 + 2 = 16$

$13 + 6 = 19$

$14 + 2 = 16$

$14 + 3 = 17$

$12 + 3 = 15$

$15 + 5 = 20$

$12 + 6 = 18$

$15 + 3 = 18$

$14 + 5 = 19$

$14 + 4 = 18$

$19 - 3 = 16$

$17 - 2 = 15$

$18 - 3 = 15$

$17 - 3 = 14$

$19 - 8 = 11$

$16 - 4 = 12$

$17 - 2 = 15$

$18 - 6 = 12$

$17 - 6 = 11$

$19 - 2 = 17$

$18 - 8 = 10$

$15 - 3 = 12$

$17 - 4 = 13$

$17 - 5 = 12$

$13 - 2 = 11$

$17 - 1 = 16$

$16 - 3 = 13$

$14 - 3 = 11$

$15 - 4 = 11$

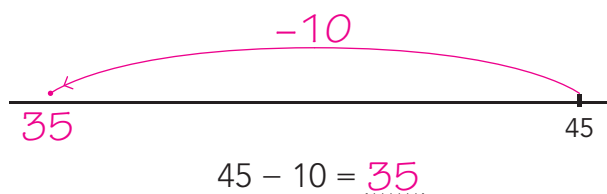
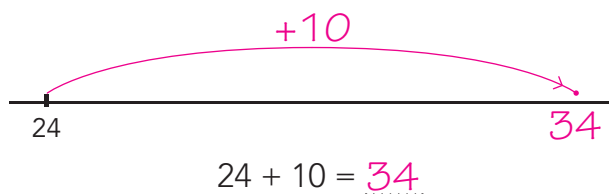
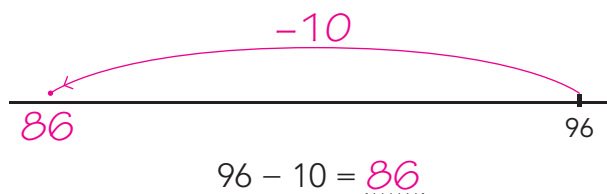
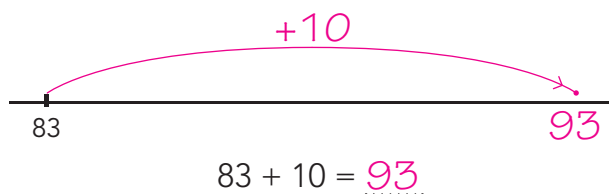
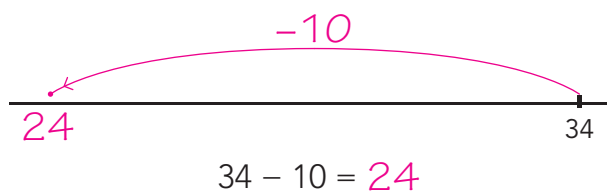
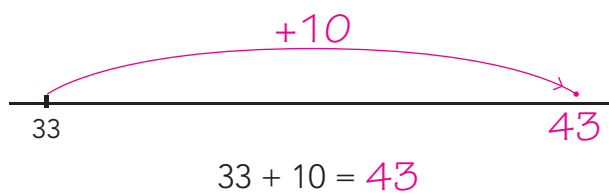
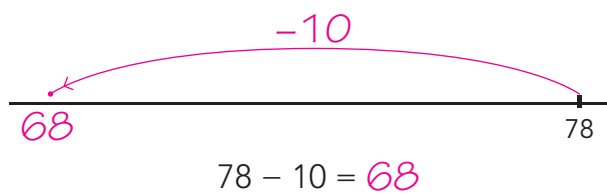
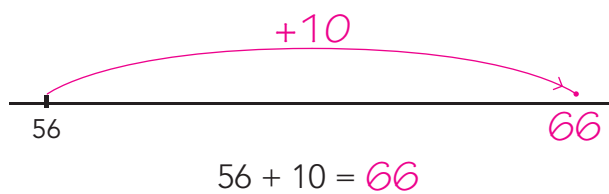
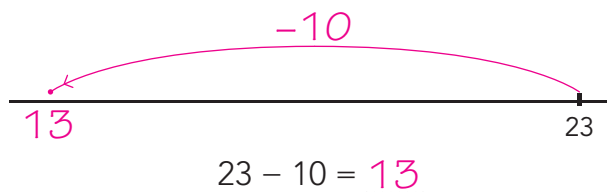
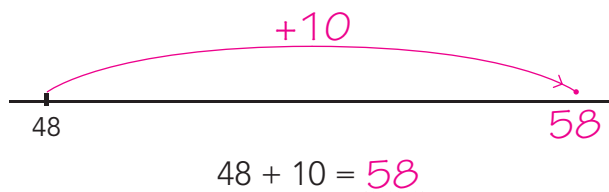
$16 - 2 = 14$

GAVERDER →

1

Reken uit.

Tekende sprong.

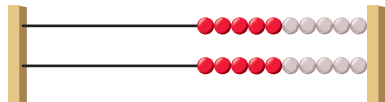


GAVERDER →

2

**Welke 2 sommen horen erbij?**

Je mag naar het rekenrek kijken.



Frank: 12 goed

Daan: 8 goed



Renske loopt een tocht van 15 kilometer. Ze heeft al 8 kilometer gelopen. Hoeveel kilometer moet ze nog lopen?

som: $15 - 8 = 7$

som: $8 + 7 = 15$

antwoord: 7 kilometer

De rode toren is 14 blokken hoog. De blauwe toren 9 blokken hoog. Hoeveel blokken heeft de rode toren meer?

som: $14 - 9 = 5$

som: $9 + 5 = 14$

antwoord: 5 blokken

Bas is 13 jaar. Zijn zusje is 8 jaar. Hoeveel jaar is zijn zusje jonger?

som: $13 - 8 = 5$

som: $8 + 5 = 13$

antwoord: 5 jaar

Frank heeft meer antwoorden goed dan Daan. Hoeveel meer?

som: $12 - 8 = 4$

som: $8 + 4 = 12$

antwoord: 4 antwoorden

De bruine doos weegt meer dan de blauwe doos. Hoeveel meer?

som: $14 - 5 = 9$

som: $5 + 9 = 14$

antwoord: 9 kilogram

3

Reken uit.

Je mag de getallenlijn gebruiken.

$89 + \underline{1} = 90$

$90 - 5 = \underline{85}$

$62 + \underline{8} = 70$

$60 - 8 = \underline{52}$

$74 + \underline{6} = 80$

$30 - 3 = \underline{27}$

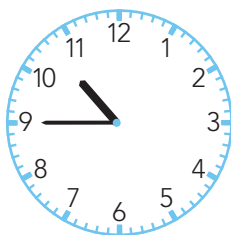
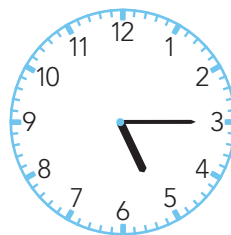
$36 + \underline{4} = 40$

$70 - 2 = \underline{68}$

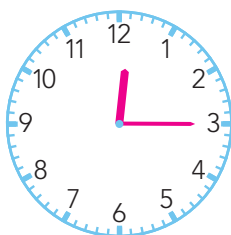
$53 + \underline{7} = 60$

$20 - 8 = \underline{12}$

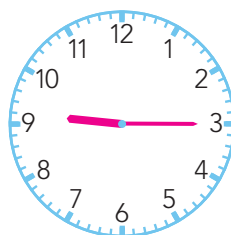
4a

Hoe laat is het?kwart voor 11kwart over 5

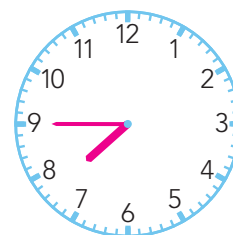
4b

Hoe laat is het?

kwart over 12



kwart over 9



kwart voor 8